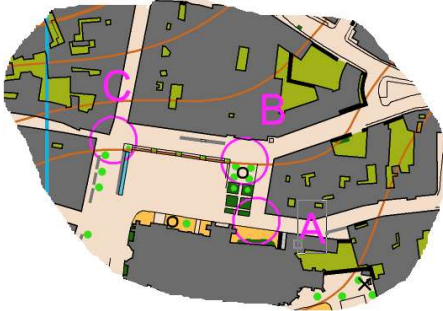


Séance N°3 Du Confiné dans Quimper Ville

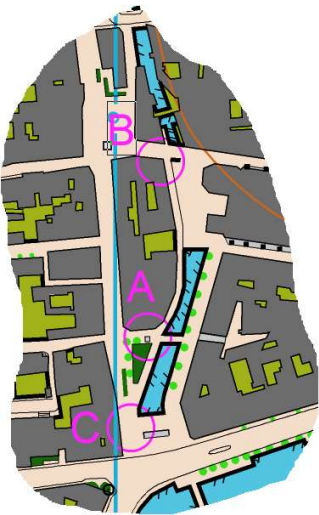
1^{er} Exo

Trouvez de quel cercle la photo a été prise

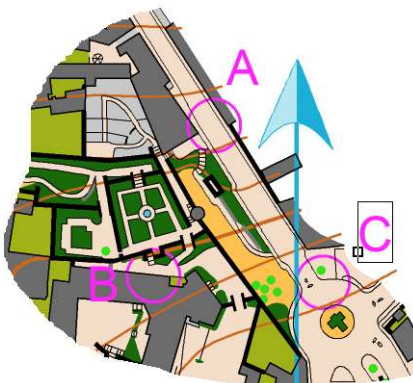
1) = B



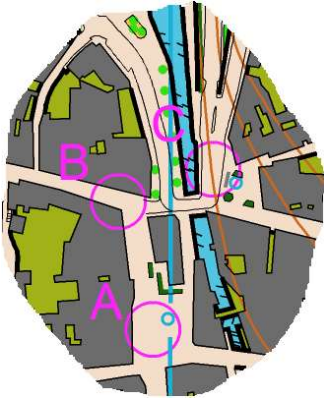
2) = C



3) = A



4) = C



5) = B




2 eme Exo

Correction de la petite balade dans quimper




1-E



2-H



3-C



4-I



5-A



6-J



7-F



8-P

9 - D



10 - B



11 - K



Arr.- O


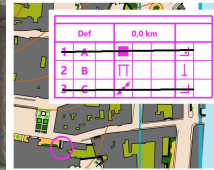


3 eme EXO

Petit exercices sur les définitions, qui sont différentes de celle utilisées en parc ou foret. En zone urbaine il est important de bien vérifier la définition du poste suivant elle peut avoir une importance sur le choix d'itinéraire. (Quel côté du grillage, Mur...)



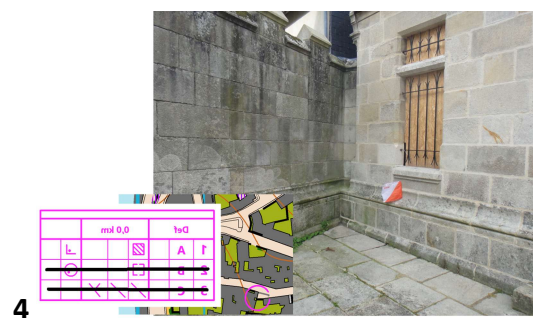
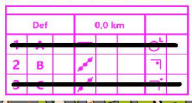
1




2



3



4



5

